

6.1, Part 2

p. 487: 7-8, 15-16, 21-31 odd, 32, 40-44, 61, 73

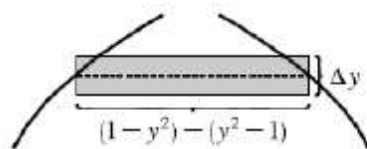
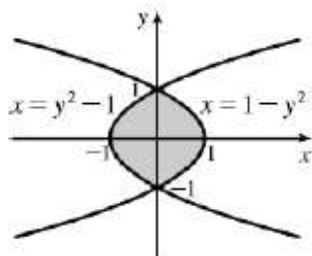
$$7. \quad A = \int_{y=-1}^{y=1} (x_R - x_L) dy = \int_{-1}^1 [e^y - (y^2 - 2)] dy = \int_{-1}^1 (e^y - y^2 + 2) dy$$

$$= \left[e^y - \frac{1}{3}y^3 + 2y \right]_{-1}^1 = (e^1 - \frac{1}{3} + 2) - (e^{-1} + \frac{1}{3} - 2) = e - \frac{1}{e} + \frac{10}{3}$$

$$8. \quad A = \int_0^3 [(2y - y^2) - (y^2 - 4y)] dy = \int_0^3 (-2y^2 + 6y) dy = \left[-\frac{2}{3}y^3 + 3y^2 \right]_0^3 = (-18 + 27) - 0 = 9$$

15. The curves intersect when $1 - y^2 = y^2 - 1 \Leftrightarrow 2 = 2y^2 \Leftrightarrow y^2 = 1 \Leftrightarrow y = \pm 1$.

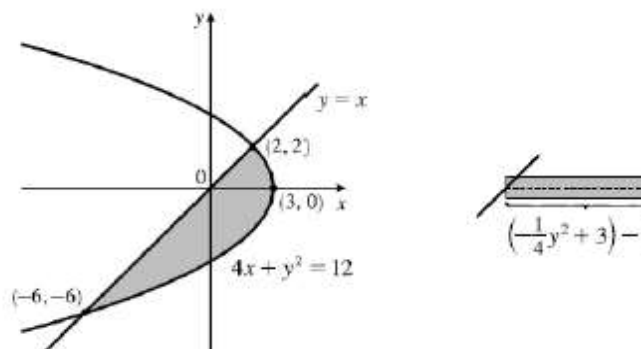
$$A = \int_{-1}^1 [(1 - y^2) - (y^2 - 1)] dy = \int_{-1}^1 2(1 - y^2) dy = 2 \cdot 2 \int_0^1 (1 - y^2) dy = 4 \left[y - \frac{1}{3}y^3 \right]_0^1 = 4 \left(1 - \frac{1}{3} \right) = \frac{8}{3}$$

16. $4x + x^2 = 12 \Leftrightarrow (x+6)(x-2) = 0 \Leftrightarrow x = -6$ or $x = 2$, so $y = -6$ or $y = 2$, and

$$A = \int_{-6}^2 \left[\left(-\frac{1}{4}y^2 + 3\right) - y \right] dy$$

$$= \left[-\frac{1}{12}y^3 - \frac{1}{2}y^2 + 3y \right]_{-6}^2$$

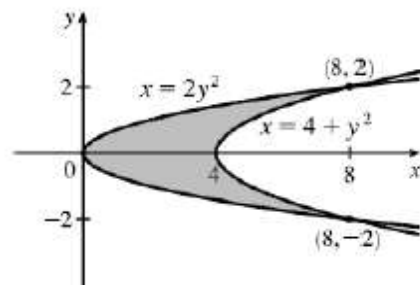
$$= \left(-\frac{2}{3} - 2 + 6 \right) - (18 - 18 - 18) = 22 - \frac{2}{3} = \frac{64}{3}$$

21. $2y^2 = 4 + y^2 \Leftrightarrow y^2 = 4 \Leftrightarrow y = \pm 2$, so

$$A = \int_{-2}^2 [(4 + y^2) - 2y^2] dy$$

$$= 2 \int_0^2 (4 - y^2) dy \quad \text{[by symmetry]}$$

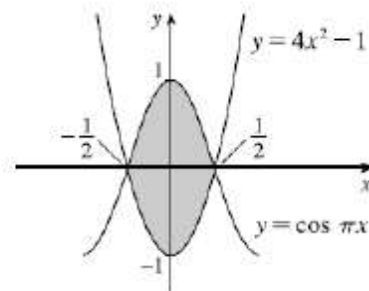
$$= 2 \left[4y - \frac{1}{3}y^3 \right]_0^2 = 2 \left(8 - \frac{8}{3} \right) = \frac{32}{3}$$

23. By inspection, the curves intersect at $x = \pm \frac{1}{2}$.

$$A = \int_{-1/2}^{1/2} [\cos \pi x - (4x^2 - 1)] dx$$

$$= 2 \int_0^{1/2} (\cos \pi x - 4x^2 + 1) dx \quad \text{[by symmetry]}$$

$$= 2 \left[\frac{1}{\pi} \sin \pi x - \frac{4}{3}x^3 + x \right]_0^{1/2} = 2 \left[\left(\frac{1}{\pi} - \frac{1}{6} + \frac{1}{2} \right) - 0 \right] = 2 \left(\frac{1}{\pi} + \frac{1}{3} \right) = \frac{2}{\pi} + \frac{2}{3}$$

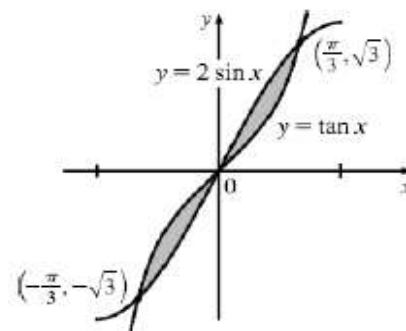


25. The curves intersect when $\tan x = 2 \sin x$ (on $[-\pi/3, \pi/3]$) \Leftrightarrow
 $\sin x = 2 \sin x \cos x \Leftrightarrow 2 \sin x \cos x - \sin x = 0 \Leftrightarrow$
 $\sin x(2 \cos x - 1) = 0 \Leftrightarrow \sin x = 0$ or $\cos x = \frac{1}{2} \Leftrightarrow x = 0$ or $x = \pm \frac{\pi}{3}$.

$$A = 2 \int_0^{\pi/3} (2 \sin x - \tan x) dx \quad [\text{by symmetry}]$$

$$= 2 \left[-2 \cos x - \ln |\sec x| \right]_0^{\pi/3} = 2 [(-1 - \ln 2) - (-2 - 0)]$$

$$= 2(1 - \ln 2) = 2 - 2 \ln 2$$



27. The curves intersect when

$$\sqrt[3]{2x} = \frac{1}{8}x^2 \Leftrightarrow 2x = \frac{1}{(2^3)^3}x^6 \Leftrightarrow 2^{10}x = x^6 \Leftrightarrow x^6 - 2^{10}x = 0 \Leftrightarrow$$

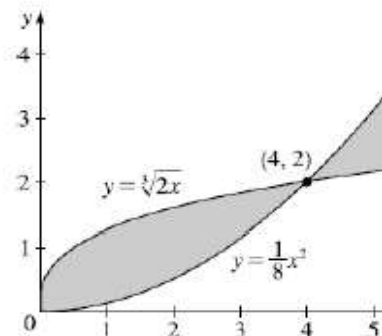
$$x(x^5 - 2^{10}) = 0 \Leftrightarrow x = 0 \text{ or } x^5 = 2^{10} \Rightarrow x = 0 \text{ or } x = 2^2 = 4, \text{ so for } 0 \leq x \leq 6,$$

$$A = \int_0^4 (\sqrt[3]{2x} - \frac{1}{8}x^2) dx + \int_4^6 (\frac{1}{8}x^2 - \sqrt[3]{2x}) dx$$

$$= \left[\frac{3}{4} \sqrt[3]{2x}^{4/3} - \frac{1}{24}x^3 \right]_0^4 + \left[\frac{1}{24}x^3 - \frac{3}{4} \sqrt[3]{2x}^{4/3} \right]_4^6$$

$$= \left(\frac{3}{4} \sqrt[3]{2} \cdot 4 \sqrt[3]{4} - \frac{64}{24} \right) - (0 - 0) + \left(\frac{216}{24} - \frac{3}{4} \sqrt[3]{2} \cdot 6 \sqrt[3]{6} \right) - \left(\frac{64}{24} - \frac{3}{4} \sqrt[3]{2} \cdot 4 \sqrt[3]{4} \right)$$

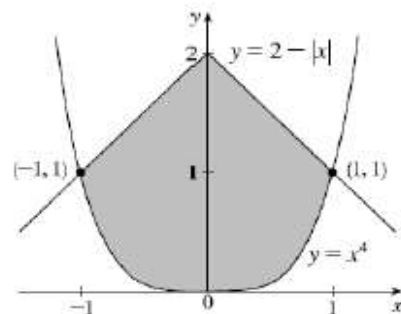
$$= 6 - \frac{8}{3} + 9 - \frac{9}{2} \sqrt[3]{12} - \frac{8}{3} + 6 = \frac{47}{3} - \frac{9}{2} \sqrt[3]{12}$$



29. By inspection, we see that the curves intersect at $x = \pm 1$ and that the area of the region enclosed by the curves is twice the area enclosed in the first quadrant.

$$A = 2 \int_0^1 [(2-x) - x^4] dx = 2 \left[2x - \frac{1}{2}x^2 - \frac{1}{5}x^5 \right]_0^1$$

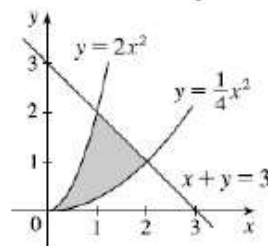
$$= 2 \left[\left(2 - \frac{1}{2} - \frac{1}{5} \right) - 0 \right] = 2 \left(\frac{13}{10} \right) = \frac{13}{5}$$



31. $\frac{1}{4}x^2 = -x + 3 \Leftrightarrow x^2 + 4x - 12 = 0 \Leftrightarrow (x+6)(x-2) = 0 \Leftrightarrow x = -6$ or 2 and
 $2x^2 = -x + 3 \Leftrightarrow 2x^2 + x - 3 = 0 \Leftrightarrow (2x+3)(x-1) = 0 \Leftrightarrow x = -\frac{3}{2}$ or 1 ,
 for $x \geq 1$.

$$A = \int_0^1 (2x^2 - \frac{1}{4}x^2) dx + \int_1^2 [(-x+3) - \frac{1}{4}x^2] dx = \int_0^1 \frac{7}{4}x^2 dx + \int_1^2 [-\frac{1}{4}x^2 - x + 3] dx$$

$$= \frac{7}{12}x^3 \Big|_0^1 + \left[-\frac{1}{12}x^3 - \frac{1}{2}x^2 + 3x \right]_1^2 = \frac{7}{12} + \left(-\frac{2}{3} - 2 + 6 \right) - \left(-\frac{1}{12} - \frac{1}{2} + 3 \right) = \frac{3}{2}$$



32. (a) Total area = $12 + 27 = 39$.

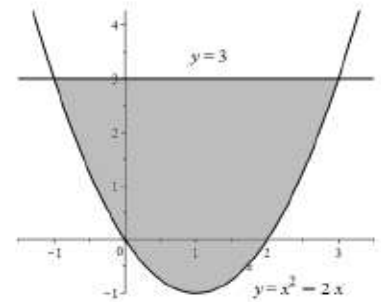
(b) $f(x) \leq g(x)$ for $0 \leq x \leq 2$ and $f(x) \geq g(x)$ for $2 \leq x \leq 5$, so

$$\int_0^5 [f(x) - g(x)] dx = \int_0^2 [f(x) - g(x)] dx + \int_2^5 [f(x) - g(x)] dx = -\int_0^2 [g(x) - f(x)] dx + \int_2^5 [f(x) - g(x)] dx$$

$$= -(12) + 27 = 15.$$

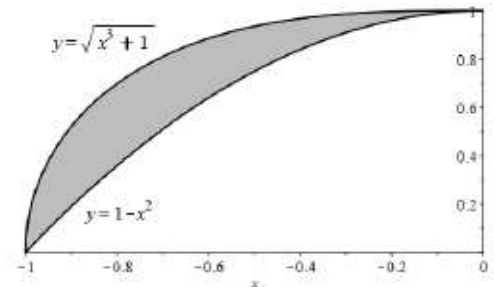
40. The curves intersect at $x = -1$ and $x = 3$, so the area of the region bound by the curves is

$$\begin{aligned} A &= \int_{-1}^3 [3 - (x^2 - 2x)] dx \\ &= \left[3x - \frac{1}{3}x^3 + x^2 \right]_{-1}^3 \\ &= (9 - 9 + 9) - \left(-3 + \frac{1}{3} + 1\right) = \frac{32}{3}, \text{ option (B)}. \end{aligned}$$



41. The curves intersect at $x = -1$ and $x = 0$, so the area of the region bound by these curves is

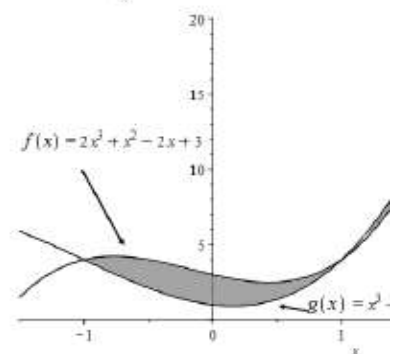
$$A = \int_{-1}^0 [\sqrt{x^3 + 1} - (1 - x^2)] dx = 0.1746, \text{ option (A)}.$$



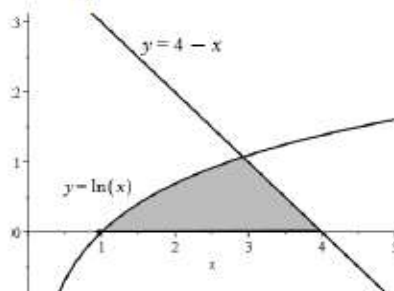
42. Solving, we find that the curves intersect at $x = -1, x = 1$ and $x = 2$. The area of the region bounded by these curves is

$$\begin{aligned} A &= \int_{-1}^1 [f(x) - g(x)] dx + \int_1^2 [g(x) - g(x)] dx \\ &= \int_{-1}^1 (x^3 - 2x^2 - x + 2) dx + \int_1^2 (-x^3 + 2x^2 + x - 2) dx \\ &= \left[\frac{1}{4}x^4 - \frac{2}{3}x^3 - \frac{1}{2}x^2 + 2x \right]_{-1}^1 + \left[-\frac{1}{4}x^4 + \frac{2}{3}x^3 + \frac{1}{2}x^2 - 2x \right]_1^2 \end{aligned}$$

$$= \left(\frac{1}{4} - \frac{2}{3} - \frac{1}{2} + 2\right) - \left(\frac{1}{4} + \frac{2}{3} - \frac{1}{2} - 2\right) + (-4 + \frac{16}{3} + 2 - 4) - \left(-\frac{1}{4} + \frac{2}{3} + \frac{1}{2} - 2\right) = \frac{37}{12} \approx 3.084, \text{ option (C)}.$$



43. Using technology, we find that the curves intersect at $x = a \approx 2.92627$, so the area bounded by the axis and these curves is $A = \int_1^a \ln x dx + \int_a^4 (4 - x) dx \approx 1.792$, option (B).



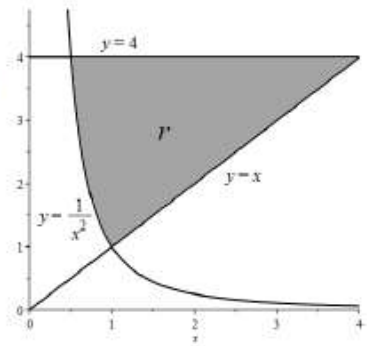
44. From the graph, we see that the curves $y = \frac{1}{x^2}$ and $y = 4$ intersect at

$(\frac{1}{2}, 4)$, the curves $y = \frac{1}{x^2}$ and $y = x$ intersect at the point $(1, 1)$, and the

curves $y = x$ and $y = 4$ intersect at the point $(4, 4)$. Thus, the area of the region bounded by these curves is

$$A = \int_{1/2}^1 \left(4 - \frac{1}{x^2}\right) dx + \int_1^4 (4 - x) dx = \left[4x + \frac{1}{x}\right]_{1/2}^1 + \left[4x - \frac{1}{2}x^2\right]_1^4$$

$$= (4+1) - (2+2) + (16-8) - (4-\frac{1}{2}) = \frac{11}{2}$$



61. (a) At time $t = 2$ seconds, Adam's velocity is $v_A(2) = \frac{40(2)}{\sqrt{2^2 + 20}} = \frac{80}{\sqrt{24}} \approx 16.2399$ ft/s, and Bassam's

velocity is $v_B(2) = \frac{36(2)}{\sqrt{2^2 + 10}} = \frac{72}{\sqrt{14}} \approx 19.243$ ft/s, so Bassam is traveling approximately 2.913 ft/s faster than Adam.

(b) The bicyclists have equal velocity when $v_A(t) = v_B(t) \Leftrightarrow \frac{40t}{\sqrt{t^2 + 20}} = \frac{36t}{\sqrt{t^2 + 10}} \Leftrightarrow$

$$\frac{\sqrt{t^2 + 10}}{\sqrt{t^2 + 20}} = \frac{36}{40} = 0.9 \Leftrightarrow \frac{t^2 + 10}{t^2 + 20} = 0.81 \Leftrightarrow t^2 + 10 = 0.81(t^2 + 20) \Leftrightarrow 0.19t^2 = 6.2 \Leftrightarrow t^2 = \frac{620}{19} \Leftrightarrow$$

$$t = \sqrt{\frac{620}{19}} \approx 5.712 \text{ seconds } [t > 0].$$

(c) We know that the area under the graph of $v_A(t)$ between $t = 0$ and $t = 20$ is $\int_0^{20} v_A(t) dt = s_A(20)$, gives Adam's displacement after 20 seconds. Similarly, the area under the graph of $v_B(t)$ between $t = 0$ and $t = 20$ is $\int_0^{20} v_B(t) dt = s_B(20)$ gives Bassam's displacement after 20 seconds. Then

$$s_A(20) = \int_0^{20} \left(\frac{40t}{\sqrt{t^2 + 20}}\right) dt = \left[40(t^2 + 20)^{1/2}\right]_0^{20} = 40(\sqrt{420} - \sqrt{20}) \approx 640.871 \text{ ft, and}$$

$$s_B(20) = \int_0^{20} \left(\frac{36t}{\sqrt{t^2 + 10}}\right) dt = \left[30(t^2 + 10)^{1/2}\right]_0^{20} = 36(\sqrt{410} - \sqrt{10}) \approx 615.102 \text{ ft. Thus, Adam is}$$

roughly 26 feet ahead of Bassam.

$$(d) d_A(t) = \int_0^t \left(\frac{40x}{\sqrt{x^2 + 20}}\right) dx = \left[40(x^2 + 20)^{1/2}\right]_0^t = 40\sqrt{t^2 + 20} - 40\sqrt{20}, \text{ and}$$

$$d_B(t) = \int_0^t \left(\frac{36x}{\sqrt{x^2 + 10}}\right) dx = \left[36(x^2 + 10)^{1/2}\right]_0^t = 36\sqrt{t^2 + 10} - 36\sqrt{10}.$$

73. We first assume that $c > 0$, since c can be replaced by $-c$ in both equations without changing the graphs, and if $c = 0$ the curves do not enclose a region. We see from the graph that the enclosed area A lies between $x = -c$ and $x = c$, and by symmetry, it is equal to four times the area in the first quadrant. The enclosed area is

$$A = 4 \int_0^c (c^2 - x^2) dx = 4 \left[c^2 x - \frac{1}{3} x^3 \right]_0^c = 4 \left(c^3 - \frac{1}{3} c^3 \right) = 4 \left(\frac{2}{3} c^3 \right) = \frac{8}{3} c^3.$$

$$\text{So } A = 576 \Leftrightarrow \frac{8}{3} c^3 = 576 \Leftrightarrow c^3 = 216 \Leftrightarrow c = \sqrt[3]{216} = 6.$$

Note that $c = -6$ is another solution, since the graphs are the same.

